

SECTION - 'A' : LANGUAGE

001 Select the incorrect option.

(1) Mouse - Mice

(2) Sheep - Sheeps

(2) Child - Children

(4) Woman - Women

002 Identify the question tag in the following sentence :

She sings very well, doesn't she ?

(1) doesn't

(2) doesn't she ?

(3) sings

(4) well

003 Choose the option that does NOT come under gender.

(1) Masculine

(2) Feminine

(3) Singular

(4) Neuter

004 Identify the type of sentence.

Come and do your duty.

(1) Assertive

(2) Interrogative

(3) Imperative

(4) Exclamatory

005 'Laughter is the best medicine.'

Identify the kind of Noun for 'laughter'.

(1) Proper Noun

(2) Common Noun

(3) Abstract Noun

(4) Collective Noun

006 Choose the correct sentence where 'enough' has been used as an adverb.

~~(1)~~ There is enough 'ink' in the pot.

(2) She has time enough to buy the shoes.

(3) He was kind enough to help me.

(4) She is enough beautiful to tempt me.

007 From the following select the most appropriate option to fill in the blank :

a _____ of ships.

(1) bundle

(2) brood

(3) fleet

(4) pack

008 Select the sentence with correct order of words.

(1) Call each other with the mice repeating calls.

(2) The mice call each other with repeating calls.

~~(3)~~ The mice call repeating calls with each other.

(4) The mice repeating calls with each other.

009 Select the correct option to fill in the blank.

Don't disturb me. I _____ my work.

(1) do

(2) did

(3) am doing

(4) does

1316

- 010 Identify the adverb.
She read the answer twice.
 (1) twice (2) answer (3) read (4) she
- 011 Choose the option that is opposite of 'brave'.
 (1) coward (2) clever (3) courageous (4) shameful
- 012 Choose the word nearest in meaning to the underlined word.
She requested him to drop her home.
(1) ordered (2) ask politely (3) instructed (4) forced
- 013 Choose the correct verb.
The baby was _____ in the room.
(1) sleep (2) sleeping (3) will sleep (4) will be sleeping
- 014 Choose the correct option to complete the idiom given below.
You have hit the nail on the _____.
 (1) head (2) leg (3) arm (4) finger
- 015 Choose the correct spelling.
 (1) Sincerity (2) Sencerity (3) Sincerrity (4) Sinceerity
- 016 Choose the correct pronoun.
_____ is standing at the gate ?
 (1) Who (2) Whom (3) Which (4) Whose
- 017 Fill in the blank with the appropriate article.
They are going to _____ Metro station.
(1) a (2) the (3) an (4) no article
- 018 Identify the adjective from the given options.
 (1) saw (2) to (3) honest (4) his
- 019 Choose the correct preposition to complete the following sentence.
The restaurant is _____ the school.
(1) up (2) behind (3) along (4) between
- 020 Complete the following sentence by choosing the correct option :
They left _____ shoes on the floor as _____ was no space on the shoe rack.
(1) they're, their (2) their, there (3) there, their (4) their, they're

ALL INDIA SAINIK SCHOOLS ENTRANCE EXAM (AISSEE)

SAINIK SCHOOL

6th
CLASS

HIGHEST
SELECTIONS

IN TELANGANA & ANDHRA PRADESH



RESIDENTIAL PROGRAM
SCHOOL + HOSTEL & COACHING

Practice Material Mock Tests Highly Qualified and Experienced Faculty

CALL: 9030409797

KRANTHI KEEN

RESIDENTIAL SCHOOL & ACADEMY

FOR SAINIK SCHOOL, NAVODAYA, RMS & RIMC

27+
YEARS OF
EXCELLENCE



8-90, P S RAO NAGAR, DAMMAIGUDA, SECUNDERABAD, TELANGANA 500083

Read the following passage carefully and answer the questions given below : (Q. 021 to Q. 025)

If you want to send a letter by post today, you have to paste a stamp on the envelope. But long ago there were no stamps. People who wanted to send a letter would fold it and stick it with wax. Then the post office would send the letter and the person who got it would have to pay for receiving the letter. The first stamp was printed in England. It was black and had a picture of Queen Victoria on it. It cost one penny (the British Paise). That is why it was called the 'Penny Black'.

The hobby of collecting stamps is known as Philately. Stamps have been brought out in many shapes and sizes. Some stamps are very valuable and can sell for a lot of money.



021 Choose the correct option to fill in the blank.

The first stamp was printed in _____.

- (1) India (2) England (3) America (4) Australia

022 Choose the correct statement.

- (1) The first stamp had a picture of a lion.
 (2) The first stamp had a picture of Queen Victoria.
(3) The first stamp had a picture of Queen Elizabeth.
(4) The first stamp had a picture of a goat.

023 Choose the correct option.

The hobby of collecting stamps is called _____.

- (1) Gardening (2) Fashion Designing
(3) Cooking (4) Philately

024 'It was black and had a picture of Queen Victoria'.

Identify the part of speech for "black" from the given sentence.

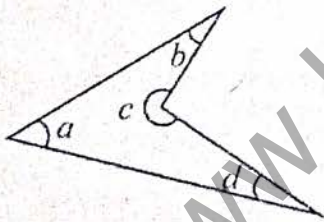
- (1) Noun (2) Pronoun (3) Adjective (4) Verb

025 Choose the opposite of 'send'.

- (1) receive (2) cost (3) brought (4) sell

SECTION - 'B' : MATHEMATICS

- 026 The normal body temperature of a human being is 37°C . Convert it to degree Fahrenheit.
 (1) 98°F (2) 97°F (3) 95°F (4) 98.5°F
- 027 The difference between -50°C and 72°C is _____.
 (1) 122°C (2) 42°C (3) $+32^{\circ}\text{C}$ (4) $+102^{\circ}\text{C}$
- 028 Express 18 kg 5g as kg
 (1) 18.5 kg (2) 18.500 kg (3) 18.05 kg (4) 18.005 kg
- 029 Find the number of zeros on 1 km when you convert a kilometer into millimeter.
 (1) 5 (2) 6 (3) 7 (4) 8
- 030 Which of the following is the correct representation for number 99?
 (1) IC (2) XCVIII (3) XCIX (4) L+XXXXIX
- 031 Find the value of : $\text{MXLII} + \text{CXCIV} - \text{LXIII}$
 (1) MCLXXIII (2) MCCCCXXIX (3) MCCLXXIII (4) MCXLIIV
- 032 Name the type of an angle whose measure is 29° more than the difference of 136° and 77° .
 (1) acute angle (2) obtuse angle (3) right angle (4) reflex angle
- 033 Which of the angles in the given figure is larger than two (2) right angles ?



- (1) Only $\angle a$ (2) Both $\angle a$ and $\angle d$
 (3) Only $\angle c$ (4) $\angle a$, $\angle b$ and $\angle d$ only
- 034 Read the given statements and choose the right option.
 Statement A : All chords of a circle are diameters.
 Statement B : Diameter is the longest chord of the circle.
 (1) Only statement A is true. (2) Only statement B is true.
 (3) Both statements are true. (4) Both statements are false.

$\angle a = \angle d$

035 A bullock cart is carrying 230 kg of sand to a construction site. If 4.65 kg sand slipped away on the way to the site, then find the amount of sand that reached the site.
 (1) 226.65 kg (2) 234.65 kg (3) 225.45 kg ~~(4) 225.35 kg~~

036 If the speed of the car is reduced from 100 km/hr to 50 km/hr, then the time taken to cover the same distance will _____.
 (1) Remain same ~~(2) Will be reduced by 50 minutes~~
 (3) Double (4) Will be increased by 50 minutes

037 A train covers a distance of 1862 km with a speed of 98 km/hr. Compute the time taken by the train to cover this distance.
 (1) 17 hours (2) 23 hours ~~(3) 19 hours~~ (4) 21 hours

038 Find the sum of 4-digit greatest number and 6-digit smallest number, each having different digits.
 (1) 109999 ~~(2) 109989~~ (3) 110020 (4) 1000989

039 Subtract 28,576 from the sum of the least and the greatest 5-digit number formed using the digits 3, 0, 5, 8 and 1.
 (1) 67,092 ~~(2) 84,653~~ (3) 68,932 (4) 73,695

040 The complement of one-fourth of a straight angle will be -
 (A) Acute angle (B) Right angle
 (C) Obtuse angle (D) Half of a right angle
 (1) Only (B) ~~(2) Only (C)~~
 (3) Both (A) and (B) ~~(4) Both (A) and (D)~~

041 An angle is three times of the half of a right angle. Find its supplement.
 (1) 90° (2) 135° (3) 145° ~~(4) 45°~~

042 While arranging the given fractions from the least to the greatest, which fraction will be at second last place?

$\frac{3}{5}, \frac{1}{3}, \frac{5}{6}, \frac{7}{15}$
 (1) $\frac{1}{3}$ (2) $\frac{5}{6}$ ~~(3) $\frac{7}{15}$~~ ~~(4) $\frac{3}{5}$~~

043 Arrange the following fractions in ascending order :

$\frac{2}{3}, \frac{5}{6}, \frac{7}{8}, \frac{9}{14}$
 (1) $\frac{2}{8}, \frac{5}{6}, \frac{7}{3}, \frac{9}{14}$ (2) $\frac{7}{8}, \frac{2}{3}, \frac{5}{6}, \frac{9}{14}$ ~~(3) $\frac{9}{14}, \frac{2}{3}, \frac{5}{6}, \frac{7}{8}$~~ ~~(4) $\frac{9}{14}, \frac{7}{8}, \frac{2}{3}, \frac{5}{6}$~~

28576

Handwritten notes on the left margin:
 25310
 10252
 2000
 28576
 28576
 28576

044 The table below shows the price of some items in a shop :

Item	Price per kg
Sugar	₹ 72
Rice	₹ 108
Coffee	₹ 237
Wheat	₹ 63

What is the ratio of combined price of Sugar and Rice to that of Coffee and Wheat ?
 (1) 9 : 14 (2) 2 : 3 (3) 4 : 5 (4) 3 : 5

045 What least number should be added to each term of the ratio 7 : 13 to get the ratio 2 : 3 ?
 (1) 1 (2) 3 (3) 5 (4) 7

046 By selling a watch for ₹ 1,275 Javed lost 15%. At what price should he sell so as to make a profit of 10% ?
 (1) ₹ 1,500 (2) ₹ 1,600 (3) ₹ 1,650 (4) ₹ 1,700

047 Seema and Ravi invested ₹ 1,50,000 in a business in the ratio of 2 : 3. At the end of the year, they made a profit of 150% on the invested sum. If they share the profit money in the same ratio, then what will be Seema's share ?
 (1) ₹ 1,50,000 (2) ₹ 20,000 (3) ₹ 1,35,000 (4) ₹ 90,000

048 Which of the given statement is true ?
 (1) $(21 - 15) - 6 = 21 - (15 - 6)$ (2) $14 \times 36 \div 6 - 10 = 84$
 (3) $93 \times 63 - 93 \times 37 = 9300$ (4) $25 + 49 \div 7 \times 5 - 6 = 54$

049 $9 + [6 + 7 \text{ of } 3 - (9 + 2 - 6 \div 2)]$
 (1) 25 (2) 26 (3) 27 (4) 28

050 The mean for 13, 14, 19, a , 17 is 22. Find the value of a .
 (1) 37 (2) 47 (3) 57 (4) 67

051 Given below are the runs scored by a batsman in 4 matches. Calculate the average runs scored by the batsman.

Match	I	II	III	IV
Runs Scored	35	0	6	98

(1) 139 (2) 140 (3) 46.66 (4) 34.75

052 What percent of 4 days is 6 hours ?

(1) $5\frac{1}{4}\%$ (2) $3\frac{1}{4}\%$ (3) $6\frac{1}{4}\%$ (4) $4\frac{1}{4}\%$

5361

EN/AREET/6/23_J]



Handwritten calculations: $1374 \div 100 = 13.74$

7

Handwritten calculations: $1374 \div 100 = 13.74$

Handwritten calculations: $1374 \div 100 = 13.74$

[Contd..

Handwritten calculations: $1374 \div 100 = 13.74$

053 Match List - I with List - II.

List - I

- (A) longest chord
- (B) space between two radii
- (C) half of a circle
- (D) half of diameter

List - II

- (I) radius
- (II) diameter
- (III) sector
- (IV) semi-circle

Choose the correct answer from the options given below :

- (1) (A)-(IV), (B)-(I), (C)-(II), (D)-(III)
- (2) (A)-(III), (B)-(I), (C)-(IV), (D)-(II)
- (3) (A)-(II), (B)-(III), (C)-(IV), (D)-(I)
- (4) (A)-(I), (B)-(II), (C)-(III), (D)-(IV)

054 Three cubes whose each edge is 4 cm are joined together to form a cuboid. Find the volume of the new cuboid formed.

- (1) 64 cm³
- (2) 0.064 cm³
- (3) 192 cm³
- (4) 12 cm³

055 The perimeter of one face of a cuboid is 40 cm. If the length and depth of this cuboid is 13 cm and 8 cm, then find the volume of the cuboid.

- (1) 846 cm³
- (2) 625 cm³
- (3) 728 cm³
- (4) 746 cm³

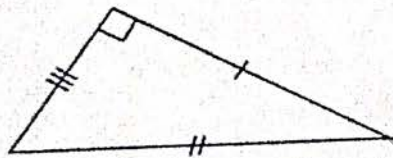
056 Which of the following are four consecutive composite numbers ?

- (1) 22, 23, 24, 25
- (2) 60, 61, 62, 65
- (3) 56, 57, 58, 59
- (4) 90, 91, 92, 93

057 A pair of twin prime number between 70 and 100 is _____

- (1) 71, 73
- (2) 79, 83
- (3) 97, 99
- (4) 87, 89

058 Name the triangle shown below based on both sides and angles.



- (1) isosceles and acute triangle
- (2) scalene and right triangle
- (3) obtuse and right triangle
- (4) equilateral and obtuse triangle

059 Given below are two statements : One is labelled as Assertion A and the other is labelled as Reason R.

Assertion A : Right angled triangle is not a regular polygon.

Reason R : All the sides and angles of a regular polygon are equal.

In the light of the above statements, choose the correct answer from the options below :

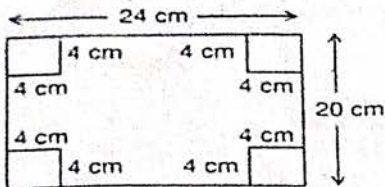
- (1) Both A and R are true and R is the correct explanation of A.
- (2) Both A and R are true but R is NOT the correct explanation of A.
- (3) A is true but R is false.
- (4) A is false but R is true.

060 Find the value of $54 \div 0.009$.

- (1) 0.006
- (2) 6.0
- (3) 6000
- (4) 48.6

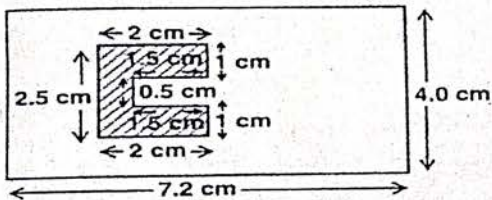
- 061 A batsman scored 190 runs which included 10 boundaries and 6 sixes. What percent of his total score did he make by running between the wickets ?
 (1) 50% (2) 60% (3) 70% (4) 75%

- 062 Riya is doing a paper cutting activity. She cuts out four identical square corners of the rectangular sheet as given in the figure. Find the area and perimeter of the remaining sheet.



- (1) 416 sq. cm 88 cm (2) 316 sq. m 80 cm
 (3) 480 sq. m. 88 cm (4) 480 sq. m 80 cm

- 063 Find the area of the unshaded region in the given figure.



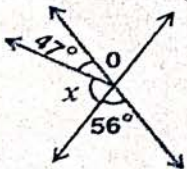
- (1) 6.75 cm^2 (2) 28.8 cm^2 (3) 24.55 cm^2 (4) 22.05 cm^2

- 064 A farmer borrowed a sum of ₹ 10,000 from a bank at 5% rate of interest per annum. How much interest will he pay the bank in 3 years ?
 (1) ₹ 30,000 (2) ₹ 1,500 (3) ₹ 500 (4) ₹ 11,500

- 065 Rijul took ₹ 50,000 from a person for 3 years at the rate of 8% per annum. Find the amount paid by Rijul to that person after 3 years.
 (1) ₹ 52,000 (2) ₹ 62,000 (3) ₹ 51,200 (4) ₹ 48,000

- 066 Find the supplement of complement of two thirds of a right angle.
 (1) 120° (2) 150° (3) 30° (4) 60°

- 067 In the figure given, the measure of x is _____.



- (1) 124° (2) 43° (3) 77° (4) 56°

068 The product of Place-value and Face value of digit 6 in the number 7860443 is _____

- (1) 3652800000 (2) 3600000000 (3) 3626580000 (4) 360000000

069 Find the smallest five digit number using three different digits.

- (1) 10000 (2) 20000 (3) 00021 (4) 10002

070 If a number is divisible by 8 and 3 both, then by which other numbers will it always be divisible.

- (1) 8 and all its factors (2) factors of 3
 (3) factors of 24 (4) factors of 12

071 The product of two numbers with LCM of 112 is 4032. The HCF of the two numbers will be _____.

- (1) 1 (2) 12 (3) 9 (4) 36

072 The cost of a dozen headphones is ₹ 78,564. Samar wants to buy five headphones. Find the amount to be paid by him to get five headphones.

- (1) ₹ 40,675 (2) ₹ 32,735 (3) ₹ 32,375 (4) ₹ 43,675

073 Trisha is arranging fruit juices for 40 classmates. She wants to serve 250 ml of juice to each of the classmate. What is the minimum number of tetrapacks she requires for serving if each tetrapack contains 2.5 l of juice ?

- (1) 2.5 (2) 3 (3) 4 (4) 10

074 Compute the reciprocal of expression given below :

$\frac{37}{15} \times \frac{45}{17}$

- (1) $\frac{17}{38}$ (2) $\frac{15}{45}$ (3) $\frac{1}{6}$ (4) does not exist

075 Radhika bought $8\frac{1}{4}$ kg of fruits. She used $2\frac{5}{6}$ kg of fruits in pudding and kept the rest for fruit salad. What is the quantity of fruit left for fruit salad ?

- (1) $6\frac{2}{12}$ kg (2) $5\frac{5}{12}$ kg (3) $6\frac{1}{24}$ kg (4) $5\frac{5}{24}$ kg

19/6

EN/AREET/6/23_J]

$$\begin{array}{r} 2 \times 3 = 6 \\ 6 \times 2 = 12 \\ \hline 10 \end{array}$$

[Contd.

- 084 Animal which can survive without water for a long time in desert.
 (1) Horse (2) Cow (3) Buffalo (4) Camel
- 085 The only species where the males bear the young.
 (1) Dolphin (2) Whale (3) Sea horse (4) Tortoise
- 086 Singlis Chham dance is related to which state ?
 (1) Assam (2) Manipur (3) Sikkim (4) Kerala
- 087 The instrument used to measure the speed of a vehicle is :
 (1) Speedometer (2) Photometer (3) Odometer (4) Tachometer
- 088 A sport where people use a board with small wheels is :
 (1) Para motoring (2) Sky diving (3) Skating (4) Skate boarding
- 089 This award is also known as the Lotus decoration and is India's second highest civilian award.
 (1) Arjuna award (2) Padma Vibhushan
 (3) Bharat Ratna (4) Ashok Chakra
- 090 _____ is the first sportsperson to win the Padma Vibhushan award in 2007.
 (1) Vishwanathan Anand (2) Sunil Gavaskar
 (3) Kapil Dev (4) Sachin Tendulkar
- 091 Choose the correct option to fill in the blank.
 Mountains arranged in a line is known as _____.
 (1) range (2) fold mountain (3) peak (4) table mountain
- 092 Choose the correct option.
 Water is known as the universal solvent because :
 (1) It has many uses.
 (2) It can remove all kinds of dust.
 (3) It is the medium in which all body metabolism happens.
 (4) It can dissolve many substances.

093 Which animal was represented on the mascot of the Delhi Asian Games 1982 ?

- (1) Elephant (2) Lion
(3) Panda (4) Tiger

094 The deficiency of which of the following vitamins causes Rickets ?

- (1) Vitamin - A (2) Vitamin - D (3) Vitamin - C (4) Vitamin - B₁₂

095 Who was the first Governor General of Independent India ?

- (1) Rajagopalachari (2) Mahatma Gandhi
 (3) Lord Mount Batten (4) Jawaharlal Nehru

096 Identify the Indian Nuclear Physicist, who was the founding Director and Professor of Physics at the Tata Institute of Fundamental Research.

- (1) Homi J. Bhabha (2) Ramanujan
(3) Vikram Sarabhai (4) Aryabhata

097 When was Bangladesh formed ?

- (1) In 1971 (2) In 1905 (3) In 1970 (4) In 1947

098 Choose the correct option.

The United Nations (UN) was founded in _____.

- (1) 1944 (2) 1945 (3) 1946 (4) 1947

099 Identify from the following, the disease related to brain.

- (1) Meningitis (2) Migraine (3) Jaundice (4) Diabetes

100 Choose the correct option.

Cow dung can be used as manure as it is rich in _____.

- (1) Nitrogen (2) Sugar (3) Mercury (4) Calcium

101 Complete the following analogy :

B : 4 :: G : ?

- (1) 36 (2) 17 (3) 18 (4) 49

102 Find the odd one out.

- (1) Orange (2) Earth (3) Egg (4) Basketball

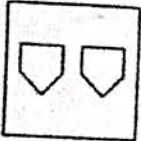
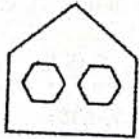
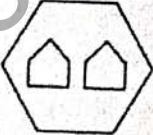
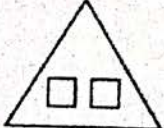
103 Find the odd one out.

- (1) 97 (2) 47 (3) 81 (4) 19

104 Pick the odd one out.

- (1) Book (2) Pencil (3) Eraser (4) Computer

105 Find the odd out.

- (1)  (2)  (3)  (4) 

106 Find the odd one out -

- (1) Kanpur (2) Vijaywada (3) Ganga (4) Guwahati

107 Choose the odd one out -

- (1) Guitar (2) Violin (3) Sitar (4) Flute

108 Complete the following analogy.

DGA : 12 :: AMQ : ?

- (1) 19 (2) 31 (3) 28 (4) 17

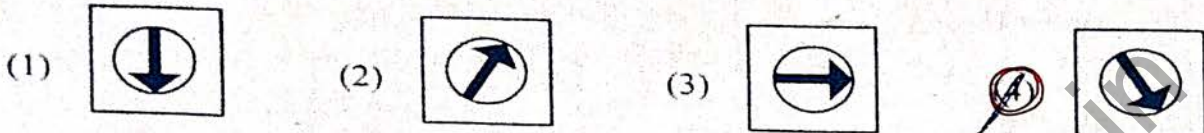
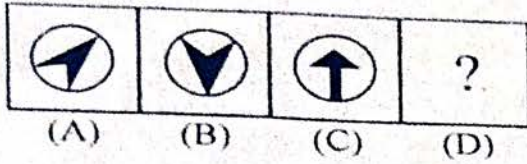
109 Find the missing number.

5 : 22 :: 8 : ?

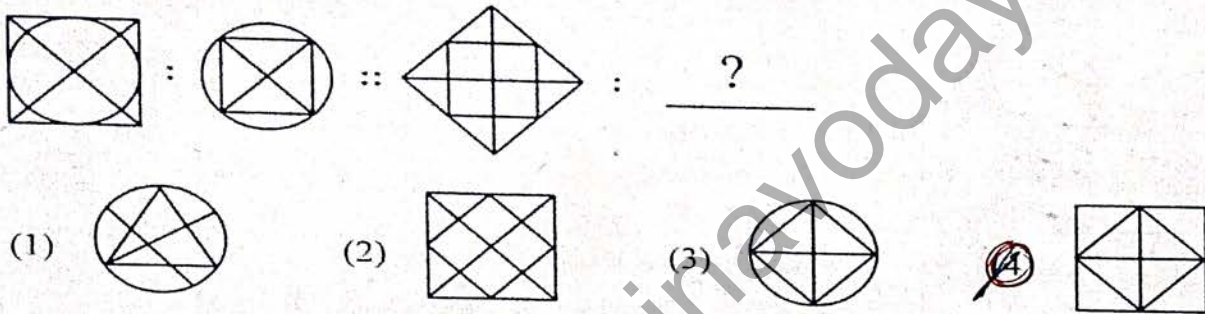
- (1) 61 (2) 37 (3) 80 (4) 50

SJ61

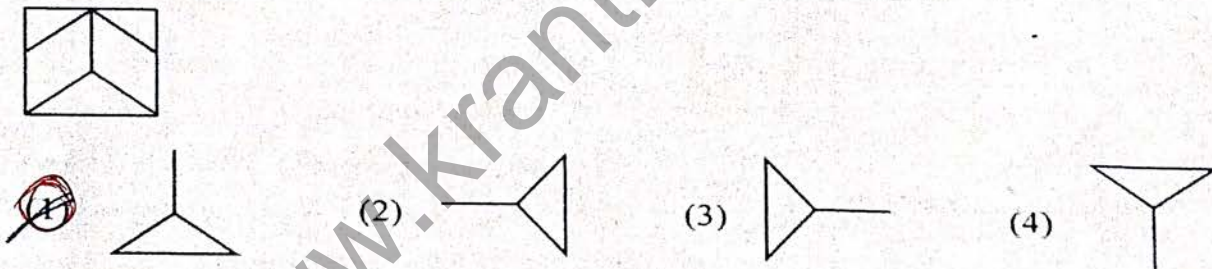
110 Figures A and B are related in a particular manner. Establish the same relationship between figure C and D by choosing a figure from the alternations, which replaces the question mark.



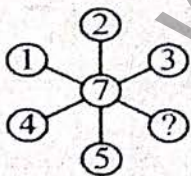
111 Complete the pattern :



112 Which of the following shapes is a part of the given figure -



113 Which number replaces the question mark ?



- (1) 8 (2) 3 (3) 4 (4) 6

114 Arrange the following in a Logical order from bottom to top.

- (A) Knee
- (B) Toes
- (C) Calves
- (D) Heel
- (E) Ankle

Choose the correct answer from the options given below :

- (1) (D), (E), (C), (B), (A)
- (2) (B), (D), (E), (C), (A)
- (3) (D), (A), (B), (C), (E)
- (4) (B), (C), (E), (D), (A)

115 Arrange the given words as they occur in the dictionary

- (A) PRISTINE
- (B) PRINTER
- (C) PREVIOUS
- (D) PREVENT
- (E) PRIORITY

Choose the correct answer from the options given below :

- (1) (B), (A), (C), (D), (E)
- (2) (C), (D), (A), (E), (B)
- (3) (D), (C), (B), (E), (A)
- (4) (A), (E), (B), (C), (D)

116 Arrange the following in a logical order :

- (A) Rain
- (B) Cooling
- (C) Condensation
- (D) Heating
- (E) Evaporation

Choose the correct answer from the options given below :

- (1) (B), (A), (C), (D), (E)
- (2) (E), (D), (A), (B), (C)
- (3) (B), (C), (A), (D), (E)
- (4) (D), (E), (B), (C), (A)

117 Which of the following is the water image of $\overline{5374}$?

- (1) 2 Ǝ 7 4
- (2) 4 7 Ǝ 2
- (3) 2 3 7 4
- (4) 2 Ǝ 7 4

118 Find the missing term.

400, 388, 376, 364, ?

- (1) 352 (2) 350 (3) 354 (4) 372

119 Find the missing term.

3, 7, 16, 35, 74, ?

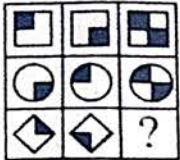
- (1) 153 (2) 160 (3) 173 (4) 151

120 Fill in the blank.

ADDG, EHHK, ILLO, MPPS, _____

- (1) PRRT (2) QUUX (3) QITW (4) PSSV

121 Select the correct figure which will complete the given grid -



- (1) (2) (3) (4)

122 Complete the following analogy :

Book : Author :: Dish : _____

- (1) Musician (2) Chef (3) Painter (4) Artist

123 Complete the following analogy :

Flood : Drought :: Genius : _____

- (1) Think (2) Intelligence (3) Brain (4) Foolish

124 Identify the relationship in the first pair and find the missing term of the second pair.

ADE : FGJ :: KNO : ?

- (1) PQR (2) PQT (3) ROP (4) TPR

125 Complete the following analogy :

Cough : Throat :: Asthama : _____

- (1) Kidney (2) Lungs (3) Head (4) Liver



ADMISSION OPEN

CLASS: 4, 5 & 6

CALL: 9030409797

KRANTHI KEEN RESIDENTIAL SCHOOL & ACADEMY

FOR SAINIK SCHOOL, NAVODAYA, RMS & RIMC

HIGHEST SELECTIONS

IN TELANGANA & ANDHRA PRADESH



27+ YEAR OF EXCELLENCE



AIR - 44

**283
300**

**RMS
170
200**

ADVAITH REDDY
S/O: Sudarshan Reddy
Ap No: 241810148995



AIR - 277

**277
300**

A ABHIRAM REDDY
S/O: A SUNIL
Ap No: 241810098150



AIR - 365

**275
300**

B VIJAY VIHAAN
S/O: B RAVI SHANKAR
Ap No: 241810087015



AIR - 450

**274
300**

**RMS
177
200**

T VIJETHA
D/O: T Kiran Kumar
Ap No: 241810189233



RMS BANGALURU

**148
200**

BHANU RAJESHWAR REDDY
S/O: SRINATH REDDY
Roll No: 513526



RMS CHAIL

**175
200**

SURYANSH BAWA
S/O: ROHIT BAWA
Roll No: 909900



RMS BANGALURU

**146
200**

AARAV RAI
S/O: RUPESH KUMAR RAI
ROLL NO: 642916



**261
300**

M VAMSIDHAR REDDY
S/O: MADHIRE ANJANEYA REDDY
AP NO: 241810119913

8-90, P S RAO NAGAR, DAMMAIGUDA, SECUNDERABAD, TELANGANA 500083